


Robot Maths - Measures of spread (range)



Example: Find the range of...

4cm, 8cm, 3cm, 6cm, 4cm



1) Circle the **highest number** and the **lowest number**

4cm, 8cm, 3cm, 6cm, 4cm



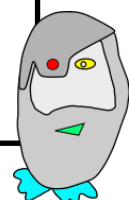
2) Work out the **highest - lowest**

A large dashed rectangular box intended for the student to write their calculation.




3) Make your final answer clear using a full sentence, including the correct unit of measure

The range is



Robot Maths - Measures of spread (range)

Example: Find the range of...



1) Circle the **highest number** and the **lowest number**

A large dashed rectangular box for working out the range.



2) Work out the **highest - lowest**

A large dashed rectangular box for working out the range.



3) Make your final answer clear using a full sentence, including the correct unit of measure

The range is

