

Robot Maths - Perimeter (simple shapes)



Example: Work out the perimeter of this shape


Perimeter is the distance **around the outside** of a shape.
The metric unit of measurement is either mm, cm, m or km.



Add the lengths of all of the sides




**Make your final answer clear using a full sentence,
including the correct unit of measurement**



The perimeter is

Robot Maths - Perimeter (simple shapes)

Example: Work out the perimeter of this shape




Perimeter is the distance **around the outside** of a shape.
The metric unit of measurement is either mm, cm, m or km.



Add the lengths of all of the sides



Make your final answer clear using a full sentence,
including the correct unit of measurement



The perimeter is

Robot Maths - Perimeter (simple shapes)

Example: Work out the perimeter of this shape




Perimeter is the distance **around the outside** of a shape.
The metric unit of measurement is either mm, cm, m or km.



Add the lengths of all of the sides



Make your final answer clear using a full sentence,
including the correct unit of measurement



The perimeter is