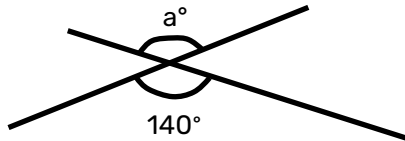
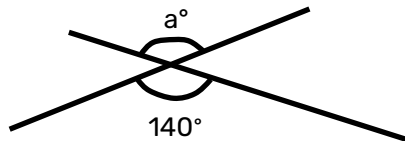


Robot Maths - Opposite angles


What is the size of the angle marked 'a'?



1) Where two lines cross, the **opposite angles are equal**.
Use the picture to find the angle marked a.

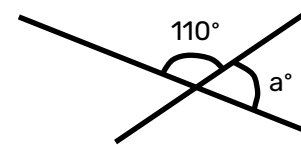


2) Make your final answer clear using a full sentence

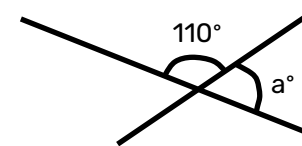


Robot Maths - Opposite angles

What is the size of the angle marked 'a'?



1) Where two lines cross, the **opposite angles are equal**.
Use the picture to find the angle marked a.



2) Make your final answer clear using a full sentence

