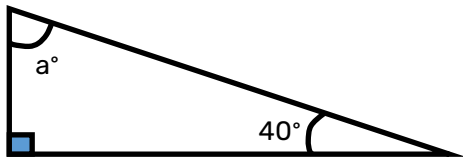


Robot Maths - Angles in a triangle

What is the size of the angle marked 'a'?



The angles in a triangle add up to 180°.


1) Add up the angles you have



2) Do 180 - the answer to step 1)

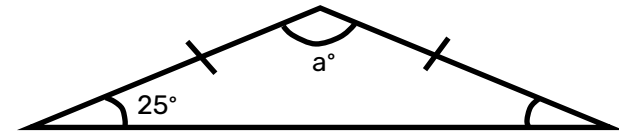


3) Make your final answer clear using a full sentence



Robot Maths - Angles in a triangle

What is the size of the angle marked 'a'?



The angles in a triangle add up to 180°.

1) Add up the angles you have



2) Do 180 - the answer to step 1)



3) Make your final answer clear using a full sentence

